





Name: _____

Date: _____

Addition to 10




Solve the addition problems.



$$1 + 3 = \underline{\quad}$$




$$5 + 1 = \underline{\quad}$$



$$2 + 3 = \underline{\quad}$$




$$6 + 2 = \underline{\quad}$$



$$5 + 5 = \underline{\quad}$$



$$3 + 3 = \underline{\quad}$$





$$9 + 1 = \underline{\quad}$$









$$4 + 2 = \underline{\quad}$$



Superstar

Count the stars in each group. Write the number in the box. Write the sum in the last box.


$$\boxed{} + \boxed{} = \boxed{}$$



$$\boxed{} + \boxed{} = \boxed{}$$




$$\boxed{} + \boxed{} = \boxed{}$$




$$\boxed{} + \boxed{} = \boxed{}$$




MATH NINJA



Ninja Aki sends his secret messages through math problems.

Decode his message to you! First complete these math problems. Then match the answers up with the letters using the chart below.

A	B	C	D	E	F	G	H	I	J	K	L	M	N	O	P	Q	R	S	T	U	V	W	X	Y	Z
1	2	3	4	5	6	7	8	9	10	11	12	13	14	15	16	17	18	19	20	21	22	23	24	25	26

ex.)

5 6

3 4

8 5

+ 9 3

- 2 0

+ 1 6

1	4	9
---	---	---

1	4
---	---

1	0	1
---	---	---

NINJA

1

2

3

4

5

1 2 3 4 5



$$\begin{array}{r} + 43 \\ 42 \\ \hline \end{array}$$

1	2

$$\begin{array}{r} - 96 \\ 84 \\ \hline \end{array}$$

3	

$$\begin{array}{r} - 73 \\ 61 \\ \hline \end{array}$$

4	

$$\begin{array}{r} + 85 \\ 73 \\ \hline \end{array}$$

5	6	

$$\begin{array}{r} - 92 \\ 77 \\ \hline \end{array}$$

7	

$$\begin{array}{r} 125 \\ + 106 \\ \hline \end{array}$$

8	9	

$$\begin{array}{r} 68 \\ + 117 \\ \hline \end{array}$$

10	11	

$$\begin{array}{r} 51 \\ - 26 \\ \hline \end{array}$$

12	

$$\begin{array}{r} 59 \\ - 44 \\ \hline \end{array}$$

13	

$$\begin{array}{r} 49 \\ - 28 \\ \hline \end{array}$$

14	

!

1

2

3

4

5

6

7

8

9

10

11

12


13

14


?

Popular Pet Tally


Use tally marks to show how many pets are in each group. Then circle the number that shows how many. The first one is done for you.




1 2 3 4 5



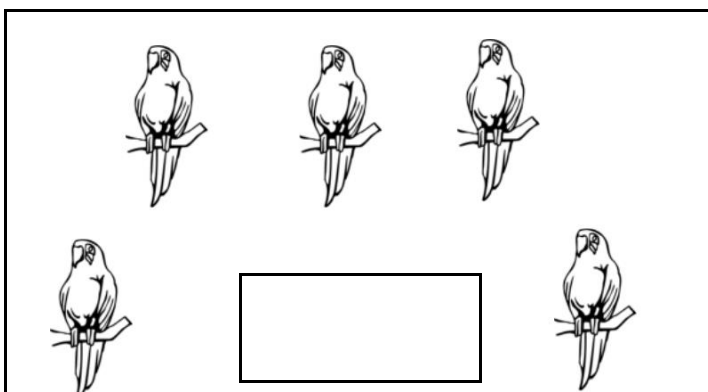
1 2 3 4 5



1 2 3 4 5



1 2 3 4 5




1 2 3 4 5




1 2 3 4 5

Favorite Fruit Tally


Use tally marks to show how many fruits are in each group. Then circle the number that shows how many. The first one is done for you.




1 2 3 4 **5**



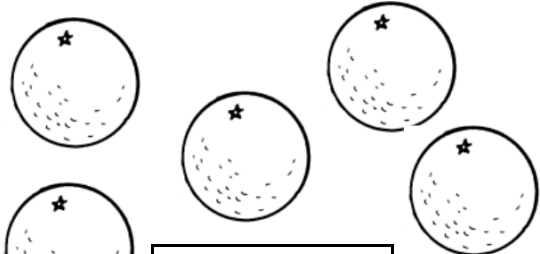
1 2 3 4 5




1 2 3 4 5



1 2 3 4 5



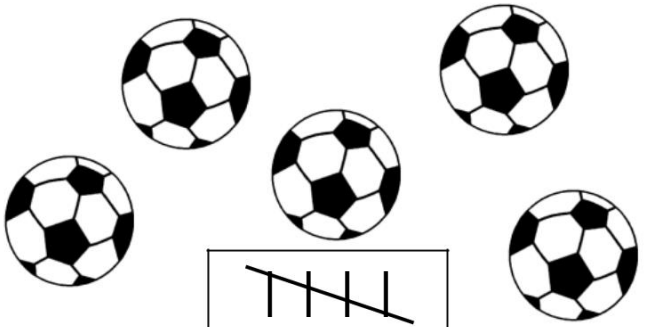
1 2 3 4 5



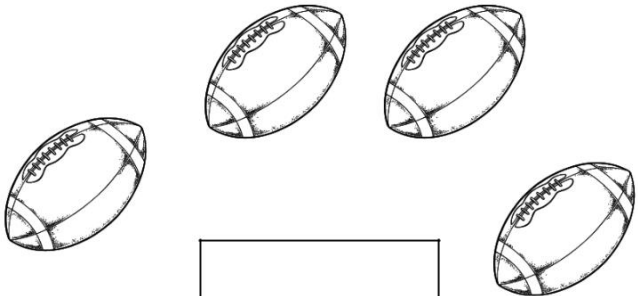
1 2 3 4 5

Favorite Sport Tally

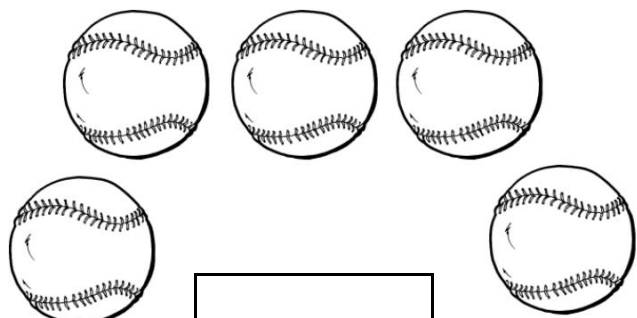
Use tally marks to show how many sports items are in each group. Then circle the number that shows how many. The first one is done for you.



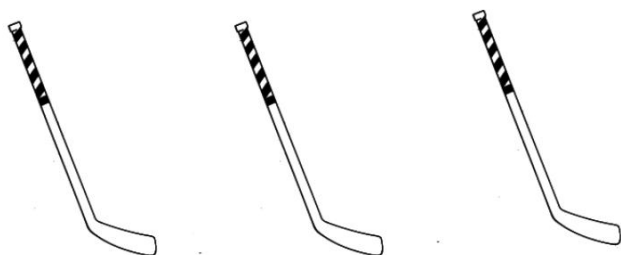
1 2 3 4 **5**




1 2 3 4 5




1 2 3 4 5



1 2 3 4 5



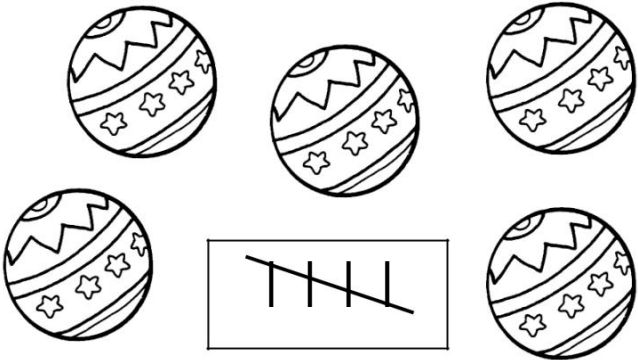
1 2 3 4 5



1 2 3 4 5


Favorite Toy Tally

Use tally marks to show how many toys are in each group. Then circle the number that shows how many. The first one is done for you.




||||


1 2 3 4 5




1 2 3 4 5




1 2 3 4 5



1 2 3 4 5



1 2 3 4 5



1 2 3 4 5





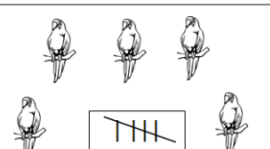

Item 3525A, 3525B, 3525C, 3525D

Tally Collection - Pets
Item 3525A

Name _____

Popular Pet Tally

Use tally marks to show how many pets are in each group. Then circle the number that shows how many. The first one is done for you.

 1 2 3 4 ⑤	 1 2 3 ④ 5
 1 2 ③ 4 5	 1 ② 3 4 5
 1 2 3 4 ⑤	 ① 2 3 4 5

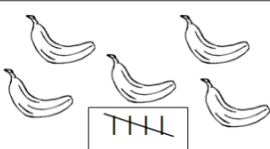
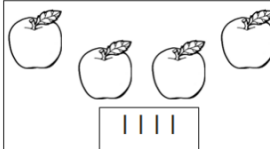

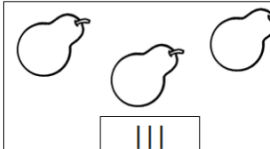
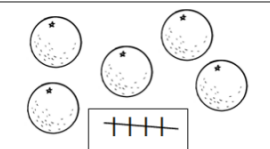

Copyright ©2012 T. Smith Publishing. All rights reserved. www.tlsbooks.com
Graphics ©2011 GraphicsFactory.com

Tally Collection - Fruit
Item 3525B

Name _____

Favorite Fruit Tally

Use tally marks to show how many fruits are in each group. Then circle the number that shows how many. The first one is done for you.

 1 2 3 4 ⑤	 1 2 3 ④ 5
 ① 2 3 4 5	 1 2 ③ 4 5
 1 2 3 4 ⑤	 1 ② 3 4 5

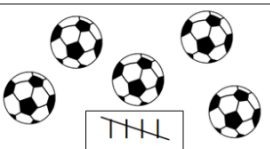
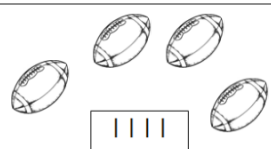
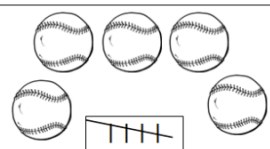
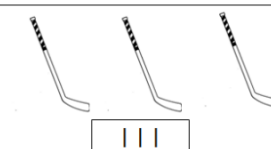
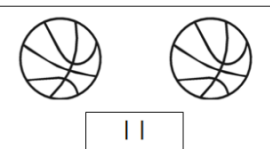

Copyright ©2012 T. Smith Publishing. All rights reserved. www.tlsbooks.com
Graphics ©2012 Jupiterimages.

Tally Collection - Sports
Item 3525C

Name _____

Favorite Sport Tally

Use tally marks to show how many sports items are in each group. Then circle the number that shows how many. The first one is done for you.

 1 2 3 4 ⑤	 1 2 3 ④ 5
 1 2 3 4 ⑤	 1 2 ③ 4 5
 1 ② 3 4 5	 ① 2 3 4 5






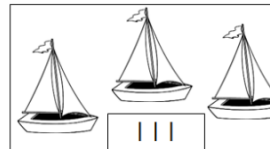
Copyright ©2012 T. Smith Publishing. All rights reserved. www.tlsbooks.com
Graphics ©2012 Jupiterimages.

Tally Collection - Toys
Item 3525D

Name _____

Favorite Toy Tally

Use tally marks to show how many toys are in each group. Then circle the number that shows how many. The first one is done for you.

 1 2 3 4 ⑤	 1 ② 3 4 5
 1 2 3 ④ 5	 1 2 3 4 ⑤
 ① 2 3 4 5	 1 2 ③ 4 5

Copyright ©2012 T. Smith Publishing. All rights reserved. www.tlsbooks.com
Graphics ©2012 Jupiterimages.

Write each missing number.

1		3		5		7			10
11		13		15		17			20
21		23		25		27			30
31		33		35		37			40
41		43		45		47			50
51		53		55		57			60
61		63		65		67			70
71		73		75		77			80
81		83		85		87			90
91		93		95		97			100